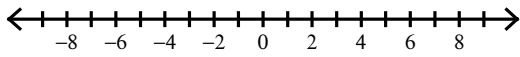


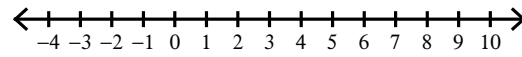
Absolute Value Inequalities

Solve each inequality and graph its solution.

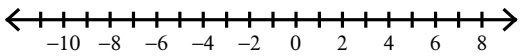
1) $|-5p| > 20$



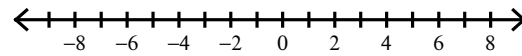
2) $|x - 3| > 3$



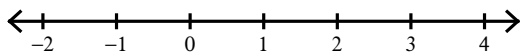
3) $|1 + x| < 8$



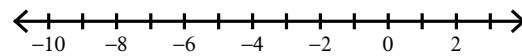
4) $|7x| \leq 42$



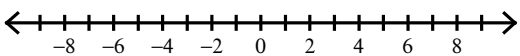
5) $|-7r| \leq 7$



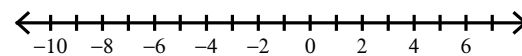
6) $|k + 3| < 4$



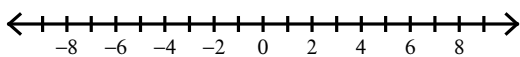
7) $|-8x - 10| < 58$



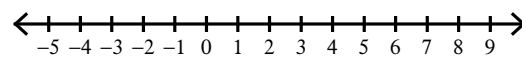
8) $|8b + 9| < 63$



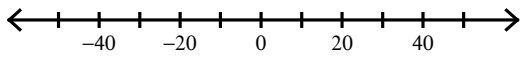
9) $|4 + 5b| > 24$



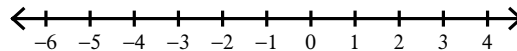
10) $|5 - 8x| < 43$



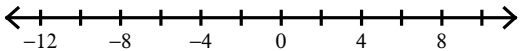
$$11) \frac{|n|}{10} \geq 5$$



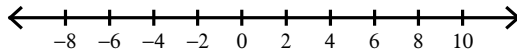
$$12) 8|n| > 8$$



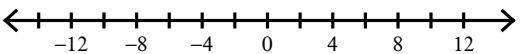
$$13) |a| - 1 \geq 6$$



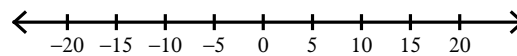
$$14) -3|x| < -18$$



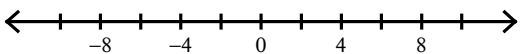
$$15) |v| - 3 > 7$$



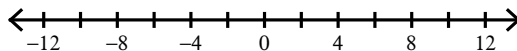
$$16) \frac{|x|}{7} < 3$$



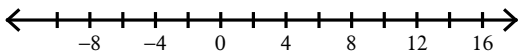
$$17) \left| \frac{x}{2} \right| + 9 > 13$$



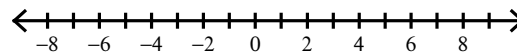
$$18) |3x| + 4 < 34$$




$$19) 7|r - 2| \leq 77$$



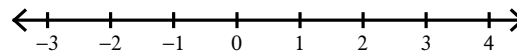
$$20) \frac{|6n|}{8} > 4$$



$$21) 10|10n - 8| \leq 80$$



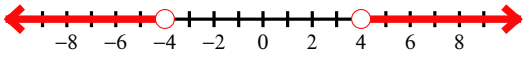
$$22) \frac{|4m + 1|}{7} \leq 1$$



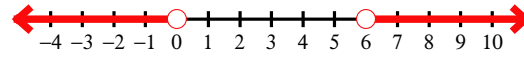
Absolute Value Inequalities

Solve each inequality and graph its solution.

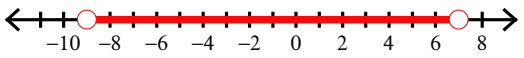
1) $|-5p| > 20$



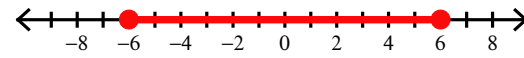
2) $|x - 3| > 3$



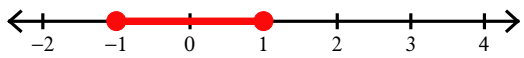
3) $|1 + x| < 8$



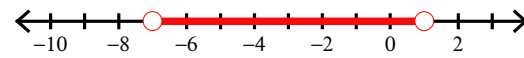
4) $|7x| \leq 42$



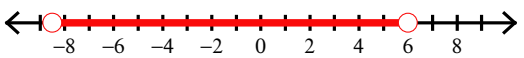
5) $|-7r| \leq 7$



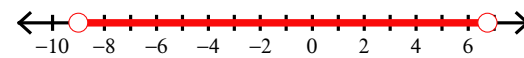
6) $|k + 3| < 4$



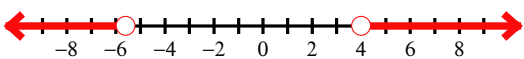
7) $|-8x - 10| < 58$



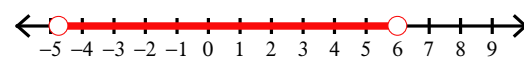
8) $|8b + 9| < 63$



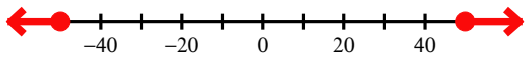
9) $|4 + 5b| > 24$



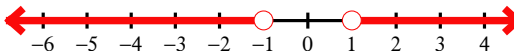
10) $|5 - 8x| < 43$



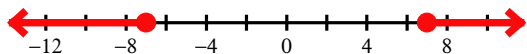
$$11) \frac{|n|}{10} \geq 5$$



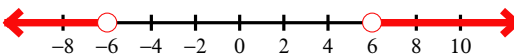
$$12) 8|n| > 8$$



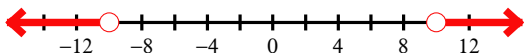
$$13) |a| - 1 \geq 6$$



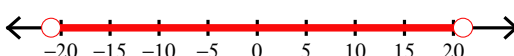
$$14) -3|x| < -18$$



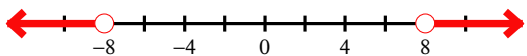
$$15) |v| - 3 > 7$$



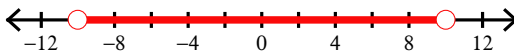
$$16) \frac{|x|}{7} < 3$$




$$17) \left| \frac{x}{2} \right| + 9 > 13$$



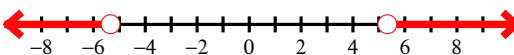
$$18) |3x| + 4 < 34$$



$$19) 7|r - 2| \leq 77$$



$$20) \frac{|6n|}{8} > 4$$



$$21) 10|10n - 8| \leq 80$$



$$22) \frac{|4m + 1|}{7} \leq 1$$

