

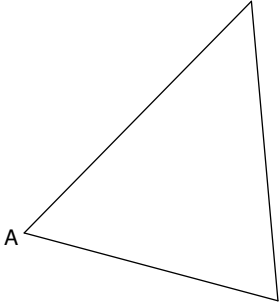
Altitudes of Triangles Constructions

© 2010 Kuta Software LLC. All rights reserved.

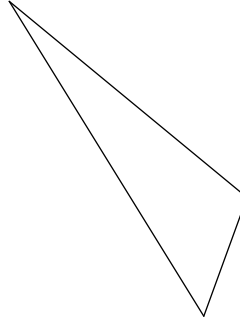
For each triangle, construct the altitude from vertex A.

Locate the orthocenter of each triangle.

1)

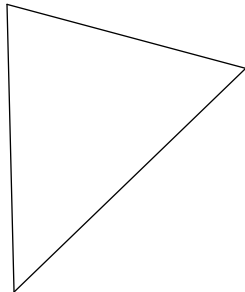


2)



For each triangle, construct all three altitudes to show they are concurrent.

3)



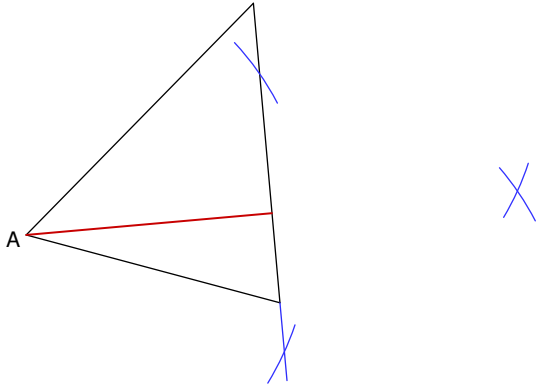
Altitudes of Triangles Constructions

© 2010 Kuta Software LLC. All rights reserved.

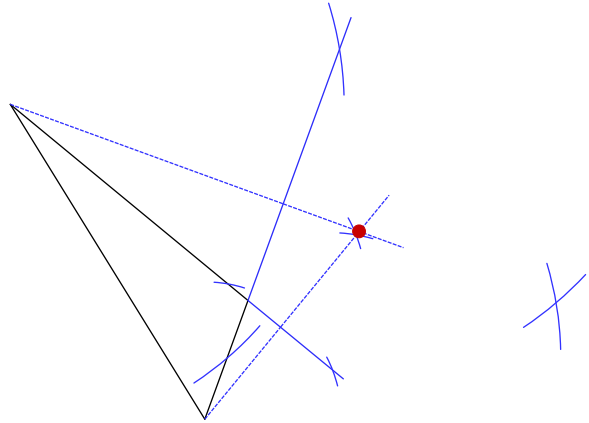
For each triangle, construct the altitude from vertex A.

Locate the orthocenter of each triangle.

1)



2)



For each triangle, construct all three altitudes to show they are concurrent.

3)

