

Medians of Triangles Constructions

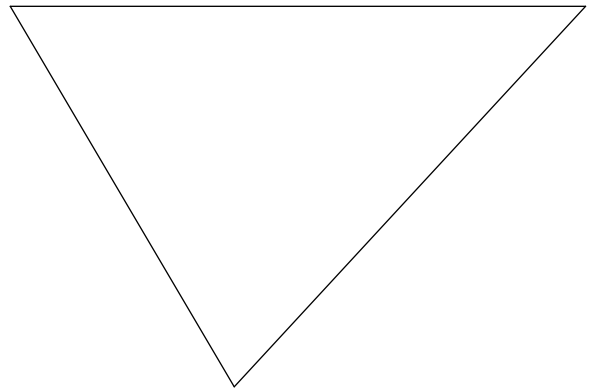
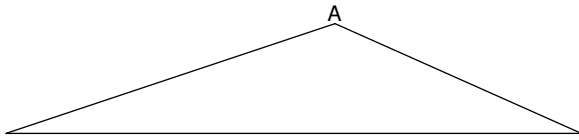
© 2010 Kuta Software LLC. All rights reserved.

For each triangle, construct the median from vertex A.

Locate the centroid of each triangle.

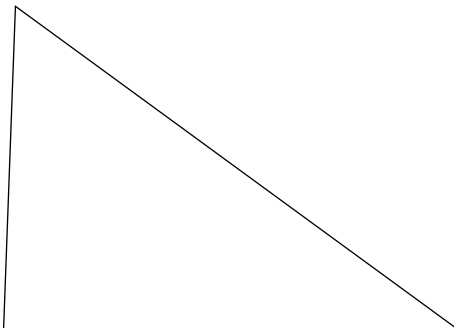
1)

2)



For each triangle, construct all three medians to show they are concurrent.

3)



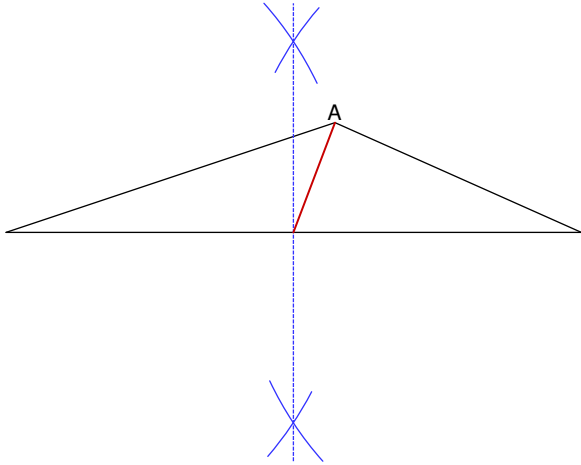
Medians of Triangles Constructions

© 2010 Kuta Software LLC. All rights reserved.

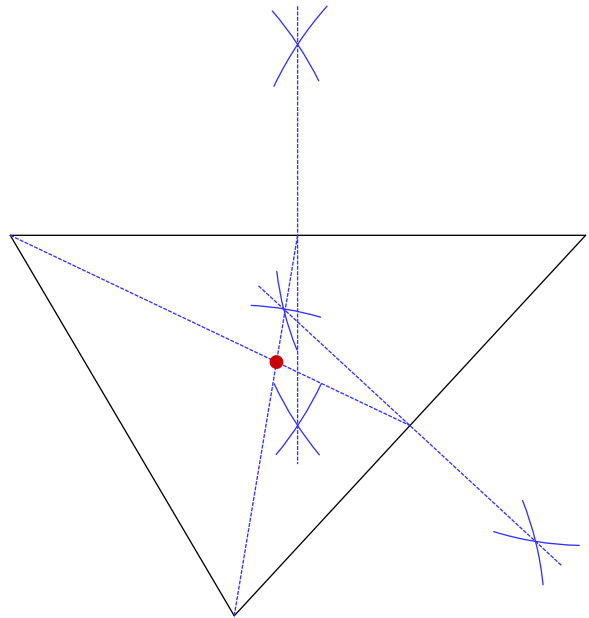
For each triangle, construct the median from vertex A.

Locate the centroid of each triangle.

1)



2)



For each triangle, construct all three medians to show they are concurrent.

3)

